

# Unit 2, Station 3, Round 1, Task 2




Fraction, Decimal

Name: \_\_\_\_\_

Determine the value written as a fraction , decimal

Ex)



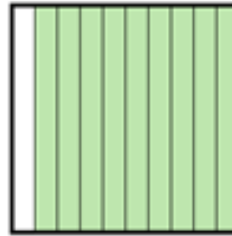
Fraction  $\frac{64}{100}$   
Decimal 0.64

1)




Fraction \_\_\_\_\_  
Decimal \_\_\_\_\_

2)



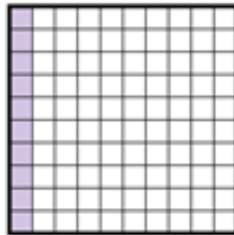
Fraction \_\_\_\_\_  
Decimal \_\_\_\_\_

3)



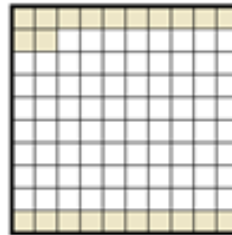
Fraction \_\_\_\_\_  
Decimal \_\_\_\_\_

4)



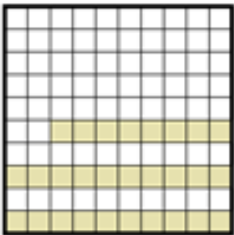
Fraction \_\_\_\_\_  
Decimal \_\_\_\_\_

5)



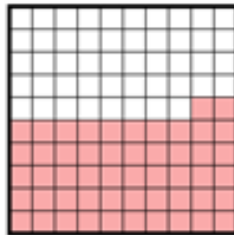
Fraction \_\_\_\_\_  
Decimal \_\_\_\_\_

6)




Fraction \_\_\_\_\_  
Decimal \_\_\_\_\_

7)



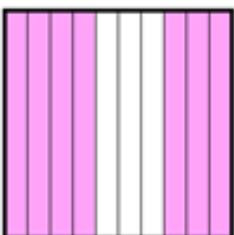
Fraction \_\_\_\_\_  
Decimal \_\_\_\_\_

8)



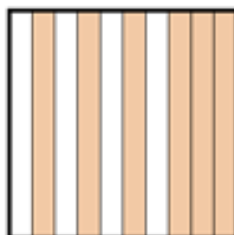
Fraction \_\_\_\_\_  
Decimal \_\_\_\_\_

9)



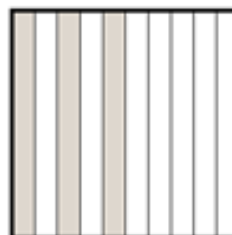
Fraction \_\_\_\_\_  
Decimal \_\_\_\_\_

10)



Fraction \_\_\_\_\_  
Decimal \_\_\_\_\_

11)



Fraction \_\_\_\_\_  
Decimal \_\_\_\_\_